



# Around the World in 30 Days

Topic Quiz

# Rules and regulations

You need to be in teams of 4.





# Practise question

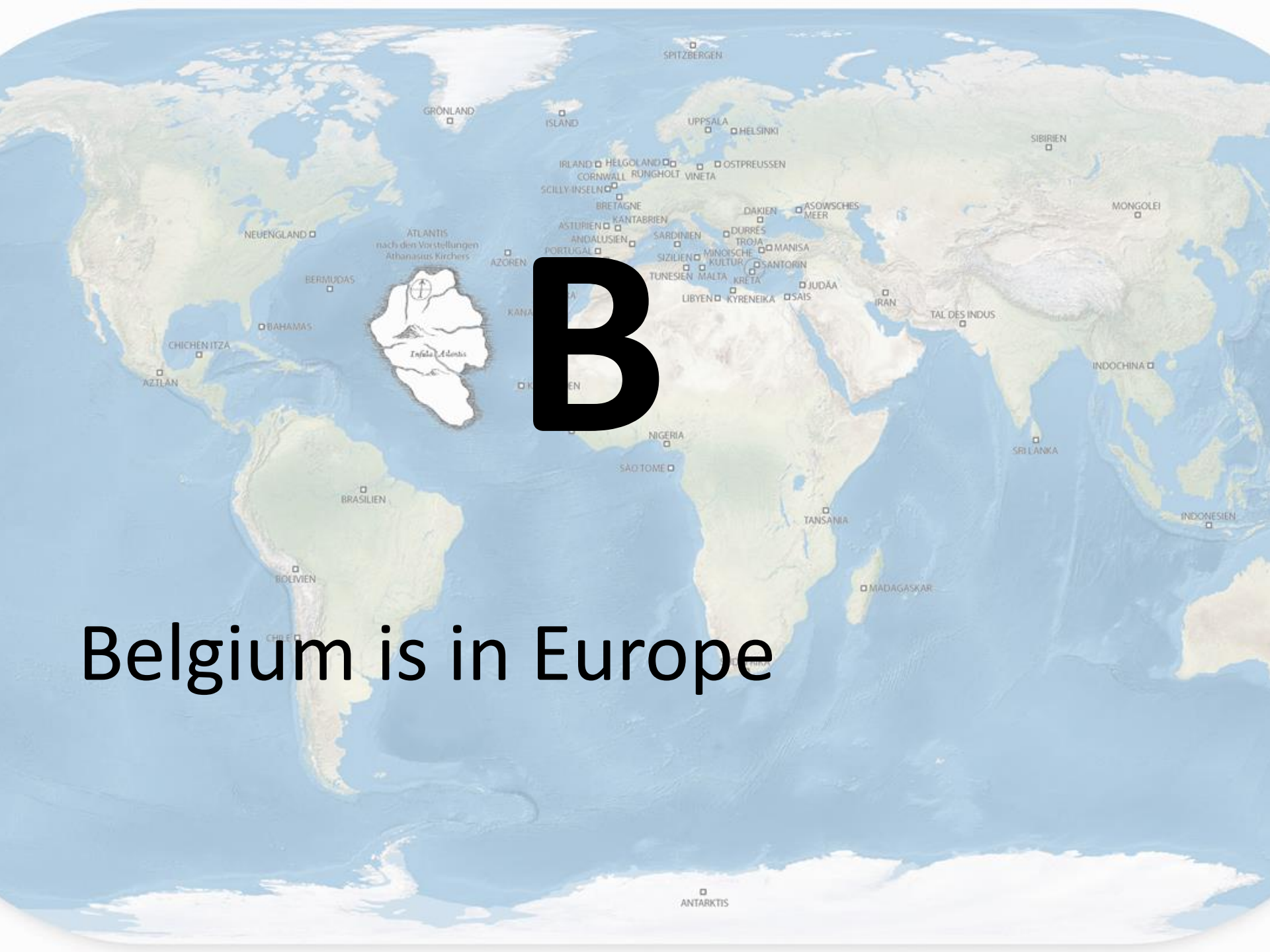
Which of the following countries is in Europe?

A) China

B) Belgium

C) Mexico

D) Egypt



B

Belgium is in Europe



# Question 1

**Which of the following countries is in North America?**

**A) Japan**

**B) Germany**

**C) Canada**

**D) Saudi Arabia**

## Question 2

**Which of the following countries is in Europe?**

**A) Finland**

**B) Morocco**

**C) India**

**D) Sweden**

## Question 3

**Which of the following countries is in Asia?**

**A) Thailand**

**B) Spain**

**C) Brazil**

**D) Algeria**

## Question 4

**Which of the following countries is in Africa?**

**A) Papua New Guinea**

**B) Sweden**

**C) China**

**D) Zimbabwe**



## Question 5

**Which of the following countries is in Australasia?**

**A) Argentina**

**B) Fiji**

**C) USA**

**D) Spain**

## Question 6

**How many continents  
are there in the world?**

**A) 3**

**B) 7**

**C) 12**

**D) 9**

# Question 7

**How many countries are there in the world?**

**A) 1000**

**B) 197**

**C) 521**

**D) 55**





Question 8

Which country has the largest population in the world?

A) China

B) Brazil

C) Japan

D) India

## Question 9

**Which country is the world's largest by land mass?**

**A) England**

**B) USA**

**C) India**

**D) Russia**

# Question 10

How many countries make up the United Kingdom?

A) 5

B) 2

C) 3

D) 4





## Question 11

**Washington DC is the capital city of which country?**

**A) France**

**B) Canada**

**C) USA**

**D) South Africa**





## Question 13

**Berlin is the capital city  
of which country?**

**A) China**

**B) Germany**

**C) Austria**

**D) Ghana**

## Question 14

**Athens is the capital city  
of which country?**

**A) Greece**

**B) Belgium**

**C) Turkey**

**D) Switzerland**



## Question 15

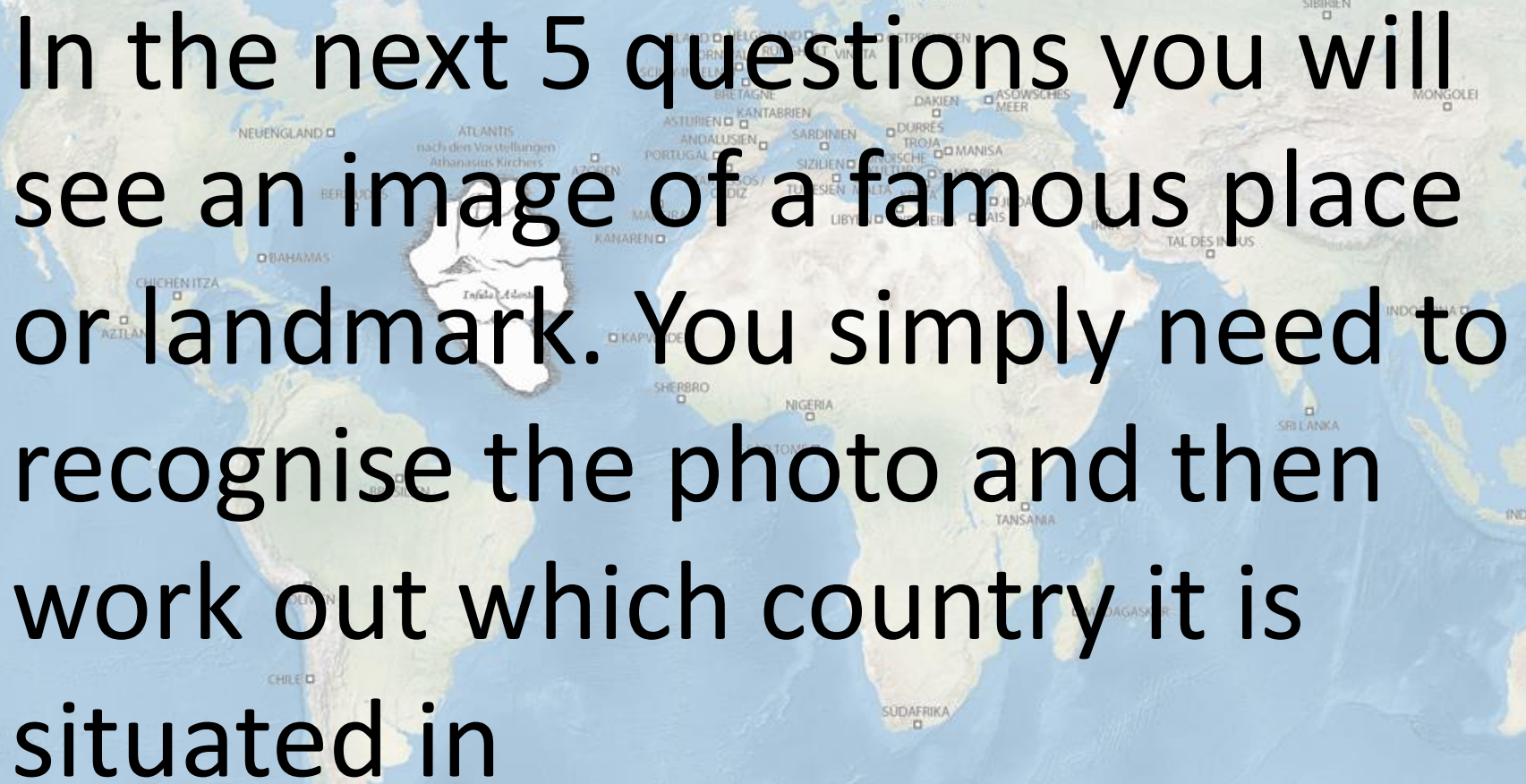
**Tokyo is the capital city of  
which country?**

**A) India**

**B) South Korea**

**C) Mexico**

**D) Japan**

A world map with a white silhouette of a famous landmark overlaid on the Atlantic Ocean. The landmark is a large, white, rectangular structure with a central tower and a smaller tower on the right side, resembling the Leaning Tower of Pisa. The map shows various countries and regions labeled in German, including Spitzbergen, Grönland, Island, Uppsala, Helsinki, Sibirien, Mongolei, Neuengland, Atlantis, Asturien, Kantabrien, Durrës, Troja, Manisa, Andalusien, Sardinien, Portugal, Sizilien, Tunesien, Libyen, Kanaren, Kap Verde, Sherrbro, Nigeria, Tombo, Sri Lanka, Indonesien, Chile, and Antarktis. The text is overlaid on the map, reading: "In the next 5 questions you will see an image of a famous place or landmark. You simply need to recognise the photo and then work out which country it is situated in".

In the next 5 questions you will see an image of a famous place or landmark. You simply need to recognise the photo and then work out which country it is situated in

# Question 16



**A) Australia**

**B) Pakistan**

**C) USA**

**D) Iraq**

# Question 17



**A) Canada**

**B) Slovakia**

**C) Paraguay**

**D) China**


# Question 18

**A) France**

**B) Belgium**

**C) Holland**

**D) Portugal**



# Question 19

**A) Japan**

**B) USA**

**C) UK**

**D) Australia**





# Question 20

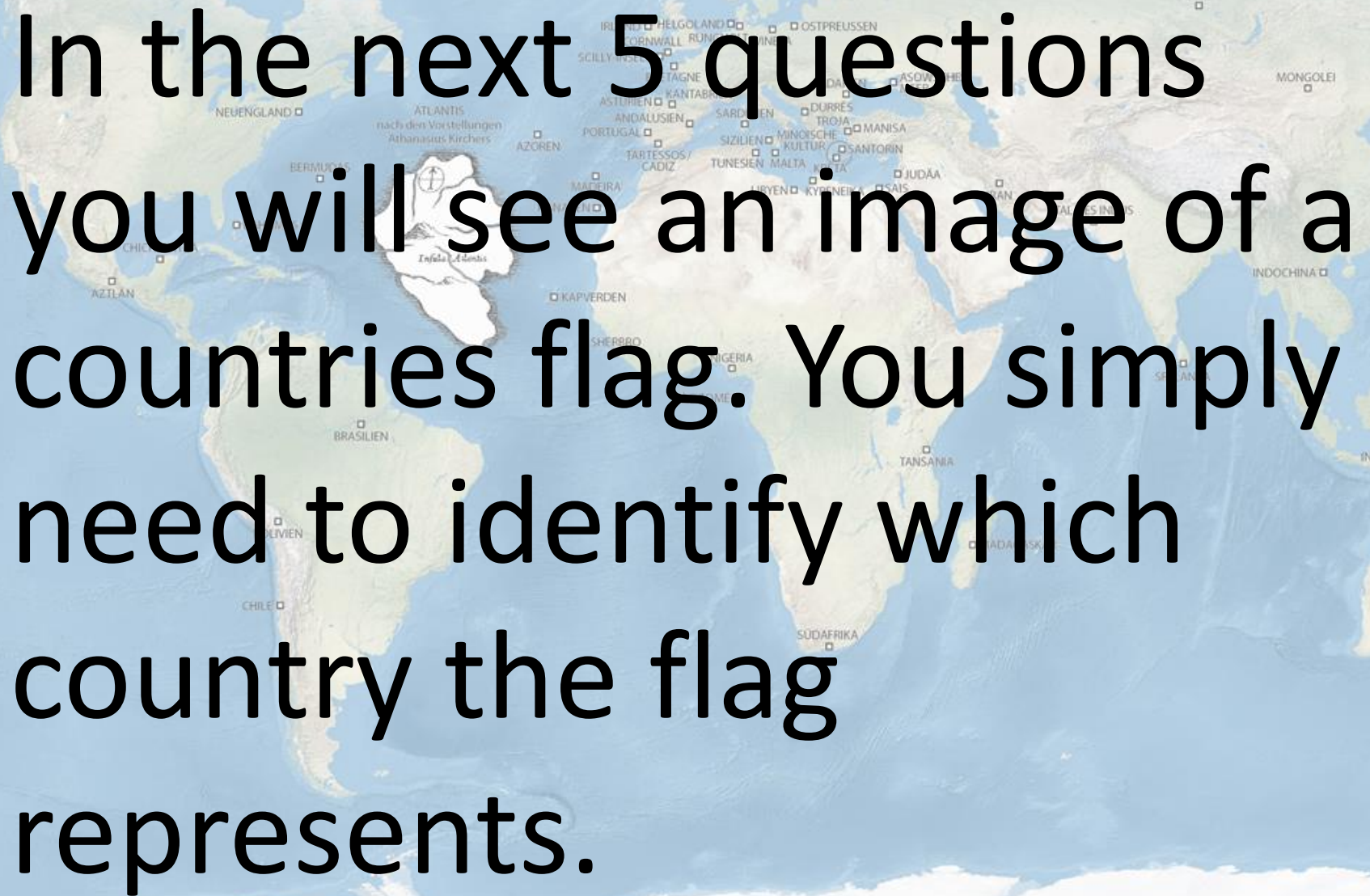


A) China

B) India

C) Mexico

D) Chile



In the next 5 questions you will see an image of a country's flag. You simply need to identify which country the flag represents.

# Question 21



**A) Holland**

**B) France**

**C) Spain**

**D) Germany**

# Question 22



**A) China**

**B) Belgium**

**C) Mexico**

**D) Egypt**

# Question 23



**A) Zimbabwe**

**B) Barbados**

**C) Nigeria**

**D) South Africa**

# Question 24



**A) India**

**B) Japan**

**C) Thailand**

**D) Algeria**

# Question 25

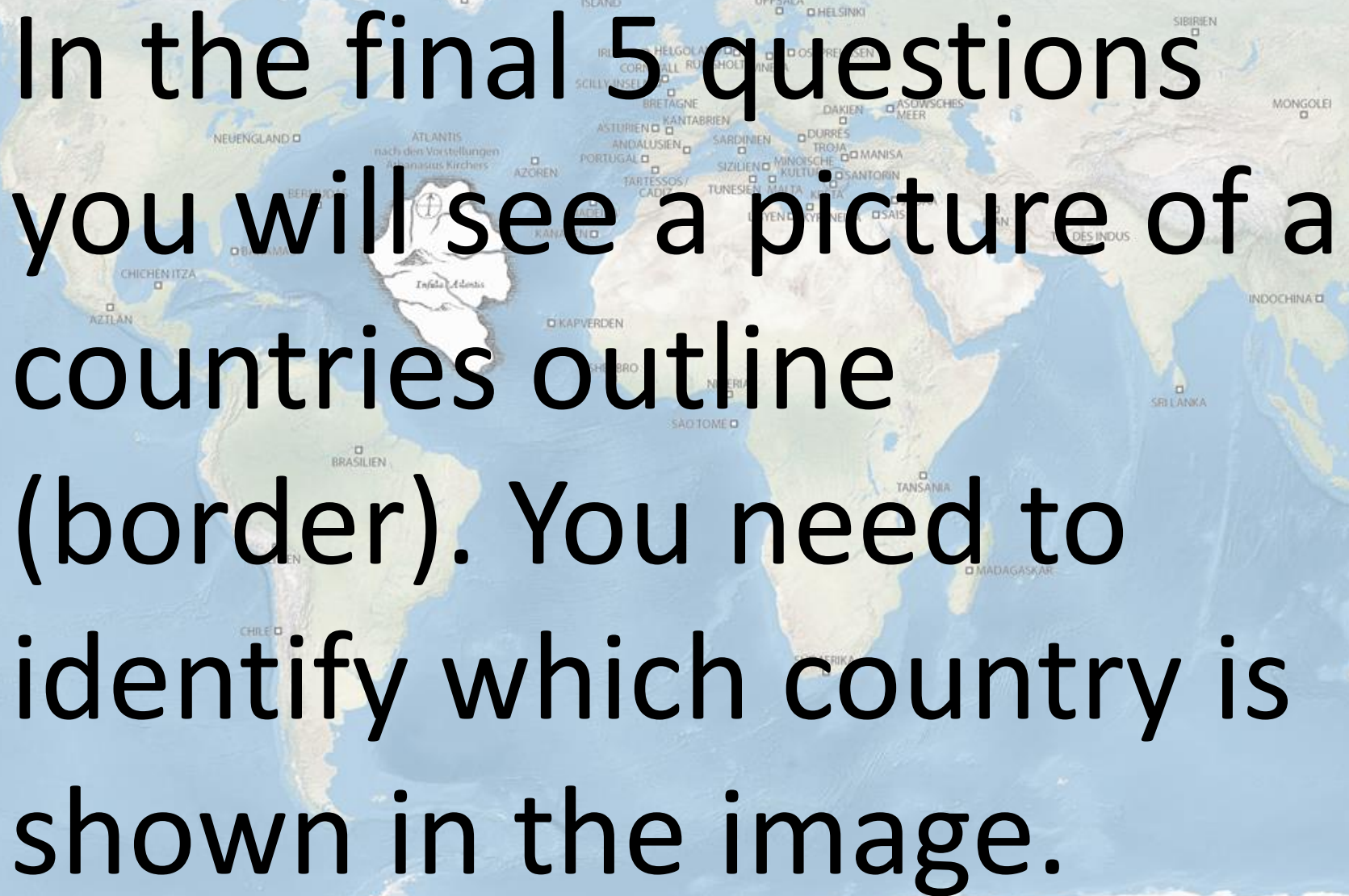


**A) Uruguay**

**B) Venezuela**

**C) Colombia**

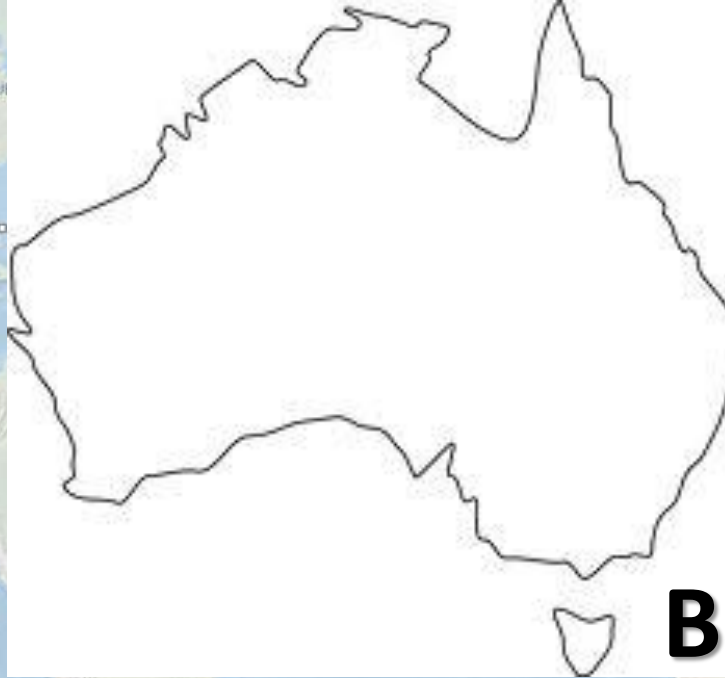
**D) Argentina**



In the final 5 questions you will see a picture of a countries outline (border). You need to identify which country is shown in the image.



# Question 26



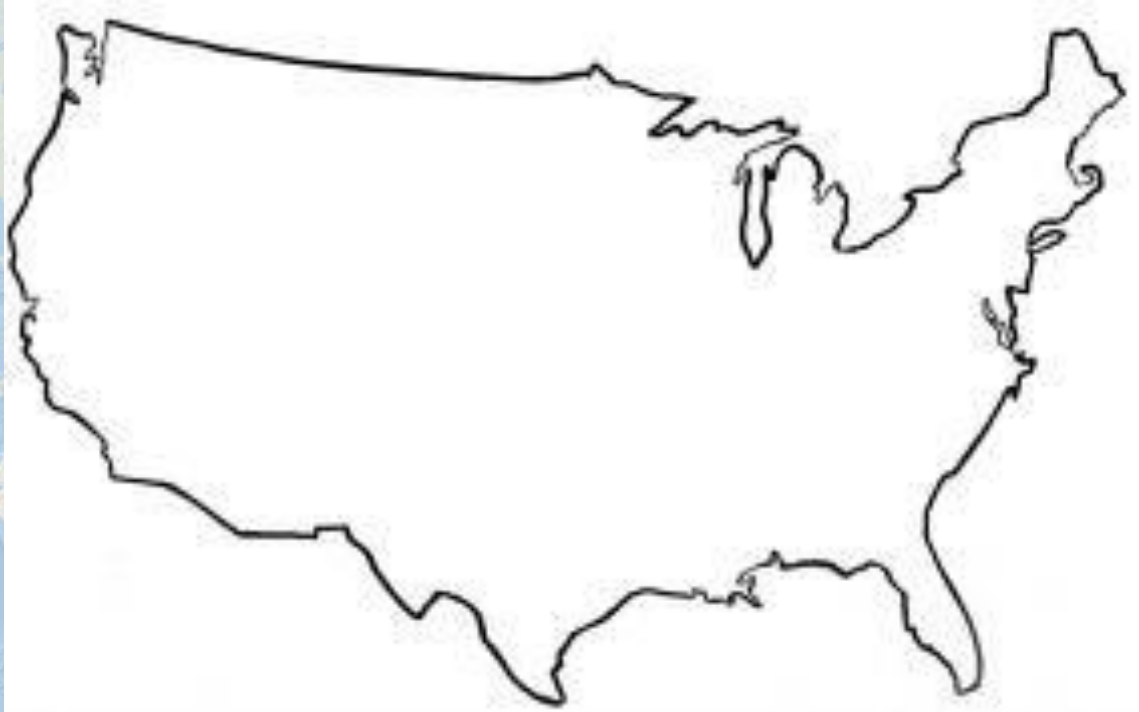
**A) UK**

**B) Australia**

**C) Brazil**

**D) Malaysia**

# Question 27



**A) China**

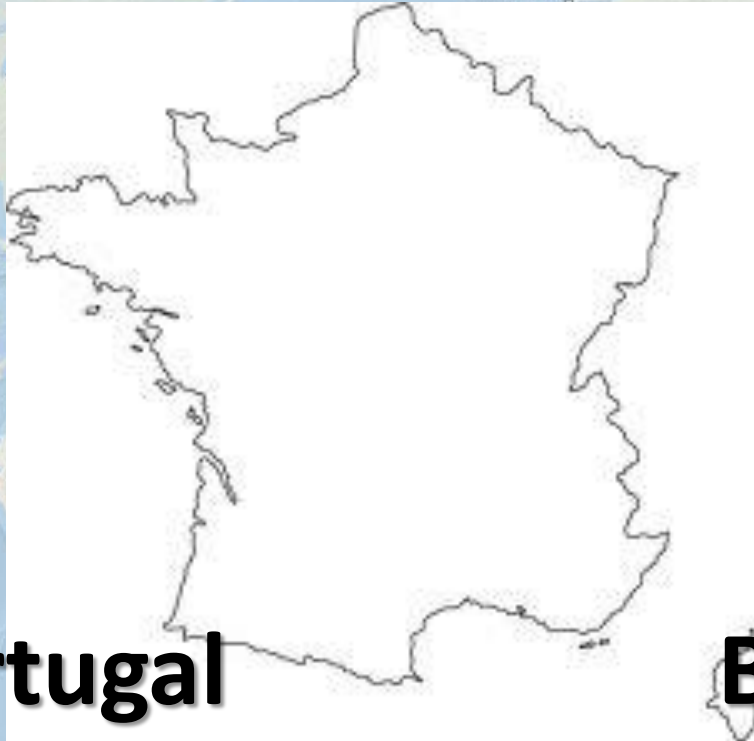
**B) USA**

**C) Canada**

**D) South Africa**



# Question 29



**A) Portugal**

**B) Holland**

**C) France**

**D) Austria**

# Question 30



**A) Japan**

**B) Greece**

**C) Cyprus**

**D) Italy**

